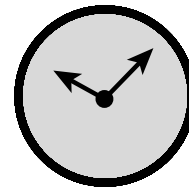


Name _____

Date _____

BASIC FACTS: ADDITION

Find the sum. Use strategies to help you.

1.
$$\begin{array}{r} 4 \\ + 5 \\ \hline \end{array}$$

2.
$$\begin{array}{r} 2 \\ + 4 \\ \hline \end{array}$$

3.
$$\begin{array}{r} 0 \\ + 7 \\ \hline \end{array}$$

4.
$$\begin{array}{r} 6 \\ + 1 \\ \hline \end{array}$$

5.
$$\begin{array}{r} 8 \\ + 2 \\ \hline \end{array}$$

6.
$$\begin{array}{r} 1 \\ + 4 \\ \hline \end{array}$$

7.
$$\begin{array}{r} 5 \\ + 4 \\ \hline \end{array}$$

8.
$$\begin{array}{r} 8 \\ + 9 \\ \hline \end{array}$$

9.
$$\begin{array}{r} 6 \\ + 5 \\ \hline \end{array}$$

10.
$$\begin{array}{r} 9 \\ + 2 \\ \hline \end{array}$$

11.
$$\begin{array}{r} 7 \\ + 8 \\ \hline \end{array}$$

12.
$$\begin{array}{r} 5 \\ + 3 \\ \hline \end{array}$$

13.
$$\begin{array}{r} 9 \\ + 9 \\ \hline \end{array}$$

14.
$$\begin{array}{r} 1 \\ + 0 \\ \hline \end{array}$$

15.
$$\begin{array}{r} 3 \\ + 5 \\ \hline \end{array}$$

16.
$$\begin{array}{r} 6 \\ + 4 \\ \hline \end{array}$$

17.
$$\begin{array}{r} 5 \\ + 9 \\ \hline \end{array}$$

18.
$$\begin{array}{r} 6 \\ + 7 \\ \hline \end{array}$$

19.
$$\begin{array}{r} 1 \\ + 9 \\ \hline \end{array}$$

20.
$$\begin{array}{r} 8 \\ + 4 \\ \hline \end{array}$$

21.
$$\begin{array}{r} 1 \\ + 5 \\ \hline \end{array}$$

22.
$$\begin{array}{r} 3 \\ + 3 \\ \hline \end{array}$$

23.
$$\begin{array}{r} 8 \\ + 8 \\ \hline \end{array}$$

24.
$$\begin{array}{r} 6 \\ + 2 \\ \hline \end{array}$$

25.
$$\begin{array}{r} 5 \\ + 7 \\ \hline \end{array}$$

26.
$$\begin{array}{r} 3 \\ + 7 \\ \hline \end{array}$$

27.
$$\begin{array}{r} 3 \\ + 9 \\ \hline \end{array}$$

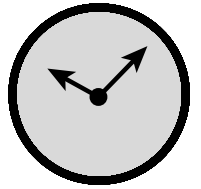
28.
$$\begin{array}{r} 5 \\ + 8 \\ \hline \end{array}$$

29.
$$\begin{array}{r} 7 \\ + 5 \\ \hline \end{array}$$

30.
$$\begin{array}{r} 2 \\ + 8 \\ \hline \end{array}$$

I need more practice with these facts:

Name _____ Date _____

BASIC FACTS: ADDITION

Find the sum. Use strategies to help you.

$$\begin{array}{r} 1. \quad 0 \\ + 4 \\ \hline \end{array}$$

$$\begin{array}{r} 2. \quad 9 \\ + 6 \\ \hline \end{array}$$

$$\begin{array}{r} 3. \quad 7 \\ + 3 \\ \hline \end{array}$$

$$\begin{array}{r} 4. \quad 4 \\ + 5 \\ \hline \end{array}$$

$$\begin{array}{r} 5. \quad 1 \\ + 8 \\ \hline \end{array}$$

$$\begin{array}{r} 6. \quad 3 \\ + 6 \\ \hline \end{array}$$

$$\begin{array}{r} 7. \quad 5 \\ + 0 \\ \hline \end{array}$$

$$\begin{array}{r} 8. \quad 2 \\ + 1 \\ \hline \end{array}$$

$$\begin{array}{r} 9. \quad 9 \\ + 8 \\ \hline \end{array}$$

$$\begin{array}{r} 10. \quad 7 \\ + 6 \\ \hline \end{array}$$

$$\begin{array}{r} 11. \quad 7 \\ + 4 \\ \hline \end{array}$$

$$\begin{array}{r} 12. \quad 4 \\ + 9 \\ \hline \end{array}$$

$$\begin{array}{r} 13. \quad 4 \\ + 1 \\ \hline \end{array}$$

$$\begin{array}{r} 14. \quad 8 \\ + 5 \\ \hline \end{array}$$

$$\begin{array}{r} 15. \quad 5 \\ + 6 \\ \hline \end{array}$$

$$\begin{array}{r} 16. \quad 4 \\ + 7 \\ \hline \end{array}$$

$$\begin{array}{r} 17. \quad 1 \\ + 3 \\ \hline \end{array}$$

$$\begin{array}{r} 18. \quad 7 \\ + 9 \\ \hline \end{array}$$

$$\begin{array}{r} 19. \quad 3 \\ + 4 \\ \hline \end{array}$$

$$\begin{array}{r} 20. \quad 2 \\ + 2 \\ \hline \end{array}$$

$$\begin{array}{r} 21. \quad 8 \\ + 7 \\ \hline \end{array}$$

$$\begin{array}{r} 22. \quad 9 \\ + 3 \\ \hline \end{array}$$

$$\begin{array}{r} 23. \quad 9 \\ + 2 \\ \hline \end{array}$$

$$\begin{array}{r} 24. \quad 7 \\ + 0 \\ \hline \end{array}$$

$$\begin{array}{r} 25. \quad 1 \\ + 1 \\ \hline \end{array}$$

$$\begin{array}{r} 26. \quad 6 \\ + 8 \\ \hline \end{array}$$

$$\begin{array}{r} 27. \quad 5 \\ + 2 \\ \hline \end{array}$$

$$\begin{array}{r} 28. \quad 0 \\ + 6 \\ \hline \end{array}$$

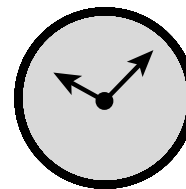
$$\begin{array}{r} 29. \quad 3 \\ + 2 \\ \hline \end{array}$$

$$\begin{array}{r} 30. \quad 0 \\ + 0 \\ \hline \end{array}$$

I need more practice with these facts:

Name _____

Date _____

BASIC FACTS: ADDITION

Find the sum. Use strategies to help you.

1.
$$\begin{array}{r} 4 \\ + 3 \\ \hline \end{array}$$

2.
$$\begin{array}{r} 6 \\ + 1 \\ \hline \end{array}$$

3.
$$\begin{array}{r} 8 \\ + 9 \\ \hline \end{array}$$

4.
$$\begin{array}{r} 2 \\ + 5 \\ \hline \end{array}$$

5.
$$\begin{array}{r} 2 \\ + 0 \\ \hline \end{array}$$

6.
$$\begin{array}{r} 2 \\ + 7 \\ \hline \end{array}$$

7.
$$\begin{array}{r} 0 \\ + 3 \\ \hline \end{array}$$

8.
$$\begin{array}{r} 7 \\ + 2 \\ \hline \end{array}$$

9.
$$\begin{array}{r} 5 \\ + 5 \\ \hline \end{array}$$

10.
$$\begin{array}{r} 9 \\ + 4 \\ \hline \end{array}$$

11.
$$\begin{array}{r} 8 \\ + 0 \\ \hline \end{array}$$

12.
$$\begin{array}{r} 3 \\ + 1 \\ \hline \end{array}$$

13.
$$\begin{array}{r} 6 \\ + 6 \\ \hline \end{array}$$

14.
$$\begin{array}{r} 2 \\ + 3 \\ \hline \end{array}$$

15.
$$\begin{array}{r} 8 \\ + 3 \\ \hline \end{array}$$

16.
$$\begin{array}{r} 4 \\ + 2 \\ \hline \end{array}$$

17.
$$\begin{array}{r} 6 \\ + 9 \\ \hline \end{array}$$

18.
$$\begin{array}{r} 0 \\ + 5 \\ \hline \end{array}$$

19.
$$\begin{array}{r} 4 \\ + 8 \\ \hline \end{array}$$

20.
$$\begin{array}{r} 4 \\ + 6 \\ \hline \end{array}$$

21.
$$\begin{array}{r} 2 \\ + 9 \\ \hline \end{array}$$

22.
$$\begin{array}{r} 0 \\ + 1 \\ \hline \end{array}$$

23.
$$\begin{array}{r} 9 \\ + 1 \\ \hline \end{array}$$

24.
$$\begin{array}{r} 1 \\ + 2 \\ \hline \end{array}$$

25.
$$\begin{array}{r} 5 \\ + 1 \\ \hline \end{array}$$

26.
$$\begin{array}{r} 9 \\ + 5 \\ \hline \end{array}$$

27.
$$\begin{array}{r} 7 \\ + 7 \\ \hline \end{array}$$

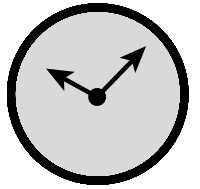
28.
$$\begin{array}{r} 4 \\ + 0 \\ \hline \end{array}$$

29.
$$\begin{array}{r} 9 \\ + 7 \\ \hline \end{array}$$

30.
$$\begin{array}{r} 8 \\ + 1 \\ \hline \end{array}$$

I need more practice with these facts:

Name _____ Date _____

BASIC FACTS: SUBTRACTION

Find the difference. Use strategies to help you.

$$\begin{array}{r} 1. \quad 9 \\ - 3 \\ \hline \end{array}$$

$$\begin{array}{r} 2. \quad 16 \\ - 8 \\ \hline \end{array}$$

$$\begin{array}{r} 3. \quad 3 \\ - 1 \\ \hline \end{array}$$

$$\begin{array}{r} 4. \quad 7 \\ - 6 \\ \hline \end{array}$$

$$\begin{array}{r} 5. \quad 12 \\ - 5 \\ \hline \end{array}$$

$$\begin{array}{r} 6. \quad 14 \\ - 9 \\ \hline \end{array}$$

$$\begin{array}{r} 7. \quad 8 \\ - 5 \\ \hline \end{array}$$

$$\begin{array}{r} 8. \quad 4 \\ - 0 \\ \hline \end{array}$$

$$\begin{array}{r} 9. \quad 10 \\ - 7 \\ \hline \end{array}$$

$$\begin{array}{r} 10. \quad 11 \\ - 2 \\ \hline \end{array}$$

$$\begin{array}{r} 11. \quad 6 \\ - 3 \\ \hline \end{array}$$

$$\begin{array}{r} 12. \quad 1 \\ - 1 \\ \hline \end{array}$$

$$\begin{array}{r} 13. \quad 7 \\ - 1 \\ \hline \end{array}$$

$$\begin{array}{r} 14. \quad 8 \\ - 8 \\ \hline \end{array}$$

$$\begin{array}{r} 15. \quad 9 \\ - 4 \\ \hline \end{array}$$

$$\begin{array}{r} 16. \quad 5 \\ - 5 \\ \hline \end{array}$$

$$\begin{array}{r} 17. \quad 16 \\ - 7 \\ \hline \end{array}$$

$$\begin{array}{r} 18. \quad 10 \\ - 6 \\ \hline \end{array}$$

$$\begin{array}{r} 19. \quad 11 \\ - 2 \\ \hline \end{array}$$

$$\begin{array}{r} 20. \quad 9 \\ - 2 \\ \hline \end{array}$$

$$\begin{array}{r} 21. \quad 14 \\ - 5 \\ \hline \end{array}$$

$$\begin{array}{r} 22. \quad 13 \\ - 6 \\ \hline \end{array}$$

$$\begin{array}{r} 23. \quad 7 \\ - 2 \\ \hline \end{array}$$

$$\begin{array}{r} 24. \quad 1 \\ - 0 \\ \hline \end{array}$$

$$\begin{array}{r} 25. \quad 9 \\ - 8 \\ \hline \end{array}$$

$$\begin{array}{r} 26. \quad 5 \\ - 4 \\ \hline \end{array}$$

$$\begin{array}{r} 27. \quad 18 \\ - 9 \\ \hline \end{array}$$

$$\begin{array}{r} 28. \quad 12 \\ - 8 \\ \hline \end{array}$$

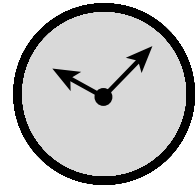
$$\begin{array}{r} 29. \quad 6 \\ - 2 \\ \hline \end{array}$$

$$\begin{array}{r} 30. \quad 15 \\ - 8 \\ \hline \end{array}$$

I need more practice with these facts:

Name _____

Date _____

BASIC FACTS: SUBTRACTION

Find the difference. Use strategies to help you.

1.
$$\begin{array}{r} 5 \\ - 1 \\ \hline \end{array}$$

2.
$$\begin{array}{r} 3 \\ - 3 \\ \hline \end{array}$$

3.
$$\begin{array}{r} 9 \\ - 0 \\ \hline \end{array}$$

4.
$$\begin{array}{r} 15 \\ - 7 \\ \hline \end{array}$$

5.
$$\begin{array}{r} 11 \\ - 3 \\ \hline \end{array}$$

6.
$$\begin{array}{r} 8 \\ - 2 \\ \hline \end{array}$$

7.
$$\begin{array}{r} 9 \\ - 7 \\ \hline \end{array}$$

8.
$$\begin{array}{r} 3 \\ - 2 \\ \hline \end{array}$$

9.
$$\begin{array}{r} 14 \\ - 8 \\ \hline \end{array}$$

10.
$$\begin{array}{r} 2 \\ - 1 \\ \hline \end{array}$$

11.
$$\begin{array}{r} 6 \\ - 4 \\ \hline \end{array}$$

12.
$$\begin{array}{r} 7 \\ - 7 \\ \hline \end{array}$$

13.
$$\begin{array}{r} 10 \\ - 5 \\ \hline \end{array}$$

14.
$$\begin{array}{r} 13 \\ - 5 \\ \hline \end{array}$$

15.
$$\begin{array}{r} 8 \\ - 0 \\ \hline \end{array}$$

16.
$$\begin{array}{r} 13 \\ - 4 \\ \hline \end{array}$$

17.
$$\begin{array}{r} 8 \\ - 4 \\ \hline \end{array}$$

18.
$$\begin{array}{r} 17 \\ - 8 \\ \hline \end{array}$$

19.
$$\begin{array}{r} 2 \\ - 0 \\ \hline \end{array}$$

20.
$$\begin{array}{r} 11 \\ - 4 \\ \hline \end{array}$$

21.
$$\begin{array}{r} 16 \\ - 9 \\ \hline \end{array}$$

22.
$$\begin{array}{r} 10 \\ - 2 \\ \hline \end{array}$$

23.
$$\begin{array}{r} 7 \\ - 3 \\ \hline \end{array}$$

24.
$$\begin{array}{r} 2 \\ - 1 \\ \hline \end{array}$$

25.
$$\begin{array}{r} 9 \\ - 9 \\ \hline \end{array}$$

26.
$$\begin{array}{r} 5 \\ - 3 \\ \hline \end{array}$$

27.
$$\begin{array}{r} 12 \\ - 7 \\ \hline \end{array}$$

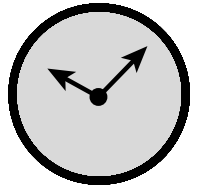
28.
$$\begin{array}{r} 7 \\ - 5 \\ \hline \end{array}$$

29.
$$\begin{array}{r} 12 \\ - 6 \\ \hline \end{array}$$

30.
$$\begin{array}{r} 15 \\ - 6 \\ \hline \end{array}$$

I need more practice with these facts:

Name _____ Date _____

BASIC FACTS: SUBTRACTION

Find the difference. Use strategies to help you.

$$\begin{array}{r} 1. \quad 7 \\ - 0 \\ \hline \end{array}$$

$$\begin{array}{r} 2. \quad 4 \\ - 3 \\ \hline \end{array}$$

$$\begin{array}{r} 3. \quad 13 \\ - 8 \\ \hline \end{array}$$

$$\begin{array}{r} 4. \quad 17 \\ - 9 \\ \hline \end{array}$$

$$\begin{array}{r} 5. \quad 4 \\ - 4 \\ \hline \end{array}$$

$$\begin{array}{r} 6. \quad 11 \\ - 7 \\ \hline \end{array}$$

$$\begin{array}{r} 7. \quad 8 \\ - 3 \\ \hline \end{array}$$

$$\begin{array}{r} 8. \quad 14 \\ - 6 \\ \hline \end{array}$$

$$\begin{array}{r} 9. \quad 10 \\ - 1 \\ \hline \end{array}$$

$$\begin{array}{r} 10. \quad 0 \\ - 0 \\ \hline \end{array}$$

$$\begin{array}{r} 11. \quad 13 \\ - 7 \\ \hline \end{array}$$

$$\begin{array}{r} 12. \quad 9 \\ - 5 \\ \hline \end{array}$$

$$\begin{array}{r} 13. \quad 6 \\ - 1 \\ \hline \end{array}$$

$$\begin{array}{r} 14. \quad 11 \\ - 5 \\ \hline \end{array}$$

$$\begin{array}{r} 15. \quad 4 \\ - 1 \\ \hline \end{array}$$

$$\begin{array}{r} 16. \quad 10 \\ - 9 \\ \hline \end{array}$$

$$\begin{array}{r} 17. \quad 12 \\ - 4 \\ \hline \end{array}$$

$$\begin{array}{r} 18. \quad 3 \\ - 0 \\ \hline \end{array}$$

$$\begin{array}{r} 19. \quad 7 \\ - 4 \\ \hline \end{array}$$

$$\begin{array}{r} 20. \quad 12 \\ - 9 \\ \hline \end{array}$$

$$\begin{array}{r} 21. \quad 6 \\ - 5 \\ \hline \end{array}$$

$$\begin{array}{r} 22. \quad 8 \\ - 1 \\ \hline \end{array}$$

$$\begin{array}{r} 23. \quad 14 \\ - 7 \\ \hline \end{array}$$

$$\begin{array}{r} 24. \quad 10 \\ - 4 \\ \hline \end{array}$$

$$\begin{array}{r} 25. \quad 5 \\ - 0 \\ \hline \end{array}$$

$$\begin{array}{r} 26. \quad 12 \\ - 3 \\ \hline \end{array}$$

$$\begin{array}{r} 27. \quad 8 \\ - 6 \\ \hline \end{array}$$

$$\begin{array}{r} 28. \quad 4 \\ - 2 \\ \hline \end{array}$$

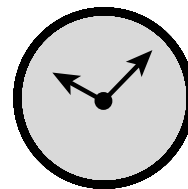
$$\begin{array}{r} 29. \quad 15 \\ - 9 \\ \hline \end{array}$$

$$\begin{array}{r} 30. \quad 8 \\ - 7 \\ \hline \end{array}$$

I need more practice with these facts:

Name _____

Date _____

BASIC FACTS: MULTIPLICATION

Find the product. Use strategies to help you.

1.
$$\begin{array}{r} 2 \\ \times 5 \\ \hline \end{array}$$

2.
$$\begin{array}{r} 4 \\ \times 1 \\ \hline \end{array}$$

3.
$$\begin{array}{r} 8 \\ \times 7 \\ \hline \end{array}$$

4.
$$\begin{array}{r} 2 \\ \times 0 \\ \hline \end{array}$$

5.
$$\begin{array}{r} 4 \\ \times 3 \\ \hline \end{array}$$

6.
$$\begin{array}{r} 6 \\ \times 3 \\ \hline \end{array}$$

7.
$$\begin{array}{r} 6 \\ \times 9 \\ \hline \end{array}$$

8.
$$\begin{array}{r} 6 \\ \times 6 \\ \hline \end{array}$$

9.
$$\begin{array}{r} 0 \\ \times 6 \\ \hline \end{array}$$

10.
$$\begin{array}{r} 2 \\ \times 7 \\ \hline \end{array}$$

11.
$$\begin{array}{r} 6 \\ \times 8 \\ \hline \end{array}$$

12.
$$\begin{array}{r} 6 \\ \times 5 \\ \hline \end{array}$$

13.
$$\begin{array}{r} 5 \\ \times 7 \\ \hline \end{array}$$

14.
$$\begin{array}{r} 3 \\ \times 5 \\ \hline \end{array}$$

15.
$$\begin{array}{r} 4 \\ \times 7 \\ \hline \end{array}$$

16.
$$\begin{array}{r} 2 \\ \times 9 \\ \hline \end{array}$$

17.
$$\begin{array}{r} 2 \\ \times 8 \\ \hline \end{array}$$

18.
$$\begin{array}{r} 3 \\ \times 3 \\ \hline \end{array}$$

19.
$$\begin{array}{r} 6 \\ \times 2 \\ \hline \end{array}$$

20.
$$\begin{array}{r} 0 \\ \times 4 \\ \hline \end{array}$$

21.
$$\begin{array}{r} 7 \\ \times 9 \\ \hline \end{array}$$

22.
$$\begin{array}{r} 7 \\ \times 5 \\ \hline \end{array}$$

23.
$$\begin{array}{r} 3 \\ \times 4 \\ \hline \end{array}$$

24.
$$\begin{array}{r} 7 \\ \times 6 \\ \hline \end{array}$$

25.
$$\begin{array}{r} 3 \\ \times 7 \\ \hline \end{array}$$

26.
$$\begin{array}{r} 4 \\ \times 6 \\ \hline \end{array}$$

27.
$$\begin{array}{r} 8 \\ \times 5 \\ \hline \end{array}$$

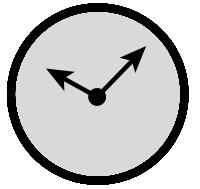
28.
$$\begin{array}{r} 4 \\ \times 8 \\ \hline \end{array}$$

29.
$$\begin{array}{r} 9 \\ \times 1 \\ \hline \end{array}$$

30.
$$\begin{array}{r} 9 \\ \times 5 \\ \hline \end{array}$$

I need more practice with these facts:

Name _____ Date _____

BASIC FACTS: MULTIPLICATION

Find the product. Use strategies to help you.

1.
$$\begin{array}{r} 0 \\ \times 8 \\ \hline \end{array}$$

2.
$$\begin{array}{r} 9 \\ \times 7 \\ \hline \end{array}$$

3.
$$\begin{array}{r} 5 \\ \times 5 \\ \hline \end{array}$$

4.
$$\begin{array}{r} 3 \\ \times 6 \\ \hline \end{array}$$

5.
$$\begin{array}{r} 2 \\ \times 1 \\ \hline \end{array}$$

6.
$$\begin{array}{r} 8 \\ \times 3 \\ \hline \end{array}$$

7.
$$\begin{array}{r} 4 \\ \times 3 \\ \hline \end{array}$$

8.
$$\begin{array}{r} 7 \\ \times 0 \\ \hline \end{array}$$

9.
$$\begin{array}{r} 1 \\ \times 7 \\ \hline \end{array}$$

10.
$$\begin{array}{r} 6 \\ \times 1 \\ \hline \end{array}$$

11.
$$\begin{array}{r} 8 \\ \times 8 \\ \hline \end{array}$$

12.
$$\begin{array}{r} 5 \\ \times 9 \\ \hline \end{array}$$

13.
$$\begin{array}{r} 9 \\ \times 2 \\ \hline \end{array}$$

14.
$$\begin{array}{r} 9 \\ \times 3 \\ \hline \end{array}$$

15.
$$\begin{array}{r} 1 \\ \times 9 \\ \hline \end{array}$$

16.
$$\begin{array}{r} 2 \\ \times 3 \\ \hline \end{array}$$

17.
$$\begin{array}{r} 0 \\ \times 0 \\ \hline \end{array}$$

18.
$$\begin{array}{r} 4 \\ \times 1 \\ \hline \end{array}$$

19.
$$\begin{array}{r} 7 \\ \times 7 \\ \hline \end{array}$$

20.
$$\begin{array}{r} 5 \\ \times 4 \\ \hline \end{array}$$

21.
$$\begin{array}{r} 5 \\ \times 1 \\ \hline \end{array}$$

22.
$$\begin{array}{r} 7 \\ \times 3 \\ \hline \end{array}$$

23.
$$\begin{array}{r} 9 \\ \times 6 \\ \hline \end{array}$$

24.
$$\begin{array}{r} 3 \\ \times 0 \\ \hline \end{array}$$

25.
$$\begin{array}{r} 3 \\ \times 6 \\ \hline \end{array}$$

26.
$$\begin{array}{r} 3 \\ \times 1 \\ \hline \end{array}$$

27.
$$\begin{array}{r} 6 \\ \times 7 \\ \hline \end{array}$$

28.
$$\begin{array}{r} 9 \\ \times 8 \\ \hline \end{array}$$

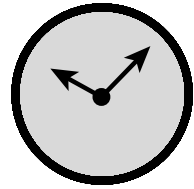
29.
$$\begin{array}{r} 2 \\ \times 6 \\ \hline \end{array}$$

30.
$$\begin{array}{r} 9 \\ \times 4 \\ \hline \end{array}$$

I need more practice with these facts:

Name _____

Date _____

BASIC FACTS: MULTIPLICATION

Find the product. Use strategies to help you.

1. $\begin{array}{r} 1 \\ \times 1 \\ \hline \end{array}$

2. $\begin{array}{r} 7 \\ \times 8 \\ \hline \end{array}$

3. $\begin{array}{r} 4 \\ \times 5 \\ \hline \end{array}$

4. $\begin{array}{r} 9 \\ \times 2 \\ \hline \end{array}$

5. $\begin{array}{r} 0 \\ \times 7 \\ \hline \end{array}$

6. $\begin{array}{r} 2 \\ \times 4 \\ \hline \end{array}$

7. $\begin{array}{r} 8 \\ \times 9 \\ \hline \end{array}$

8. $\begin{array}{r} 8 \\ \times 1 \\ \hline \end{array}$

9. $\begin{array}{r} 1 \\ \times 6 \\ \hline \end{array}$

10. $\begin{array}{r} 5 \\ \times 2 \\ \hline \end{array}$

11. $\begin{array}{r} 7 \\ \times 4 \\ \hline \end{array}$

12. $\begin{array}{r} 9 \\ \times 0 \\ \hline \end{array}$

13. $\begin{array}{r} 5 \\ \times 6 \\ \hline \end{array}$

14. $\begin{array}{r} 7 \\ \times 3 \\ \hline \end{array}$

15. $\begin{array}{r} 8 \\ \times 6 \\ \hline \end{array}$

16. $\begin{array}{r} 3 \\ \times 4 \\ \hline \end{array}$

17. $\begin{array}{r} 5 \\ \times 8 \\ \hline \end{array}$

18. $\begin{array}{r} 8 \\ \times 4 \\ \hline \end{array}$

19. $\begin{array}{r} 9 \\ \times 9 \\ \hline \end{array}$

20. $\begin{array}{r} 0 \\ \times 1 \\ \hline \end{array}$

21. $\begin{array}{r} 4 \\ \times 4 \\ \hline \end{array}$

22. $\begin{array}{r} 0 \\ \times 5 \\ \hline \end{array}$

23. $\begin{array}{r} 3 \\ \times 8 \\ \hline \end{array}$

24. $\begin{array}{r} 6 \\ \times 2 \\ \hline \end{array}$

25. $\begin{array}{r} 2 \\ \times 2 \\ \hline \end{array}$

26. $\begin{array}{r} 5 \\ \times 3 \\ \hline \end{array}$

27. $\begin{array}{r} 8 \\ \times 0 \\ \hline \end{array}$

28. $\begin{array}{r} 3 \\ \times 9 \\ \hline \end{array}$

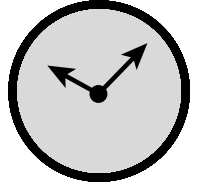
29. $\begin{array}{r} 9 \\ \times 6 \\ \hline \end{array}$

30. $\begin{array}{r} 4 \\ \times 9 \\ \hline \end{array}$

I need more practice with these facts:

Name _____

Date _____

BASIC FACTS: DIVISION

.....

Find the quotient. Use strategies to help you.

1. $1 \overline{)6}$

2. $7 \overline{)28}$

3. $4 \overline{)12}$

4. $5 \overline{)45}$

5. $3 \overline{)0}$

6. $6 \overline{)36}$

7. $3 \overline{)27}$

8. $2 \overline{)10}$

9. $8 \overline{)8}$

10. $9 \overline{)63}$

11. $3 \overline{)21}$

12. $6 \overline{)12}$

13. $5 \overline{)25}$

14. $7 \overline{)56}$

15. $2 \overline{)2}$

16. $4 \overline{)36}$

17. $5 \overline{)15}$

18. $1 \overline{)3}$

19. $5 \overline{)35}$

20. $3 \overline{)9}$

21. $1 \overline{)9}$

22. $2 \overline{)4}$

23. $6 \overline{)0}$

24. $8 \overline{)48}$

25. $9 \overline{)27}$

26. $4 \overline{)24}$

27. $2 \overline{)14}$

28. $6 \overline{)24}$

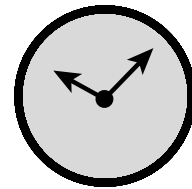
29. $4 \overline{)20}$

30. $2 \overline{)18}$

I need more practice with these facts:

Name _____

Date _____

BASIC FACTS: DIVISION

Find the quotient. Use strategies to help you.

$1.6 \overline{)42}$

$2.4 \overline{)32}$

$3.5 \overline{)0}$

$4.1 \overline{)2}$

$5.3 \overline{)15}$

$6.8 \overline{)64}$

$7.3 \overline{)3}$

$8.6 \overline{)18}$

$9.7 \overline{)49}$

$10.3 \overline{)6}$

$11.1 \overline{)5}$

$12.8 \overline{)40}$

$13.9 \overline{)72}$

$14.5 \overline{)30}$

$15.9 \overline{)0}$

$16.4 \overline{)16}$

$17.5 \overline{)10}$

$18.7 \overline{)21}$

$19.3 \overline{)18}$

$20.6 \overline{)6}$

$21.6 \overline{)54}$

$22.2 \overline{)16}$

$23.9 \overline{)45}$

$24.7 \overline{)14}$

$25.5 \overline{)20}$

$26.1 \overline{)0}$

$27.6 \overline{)48}$

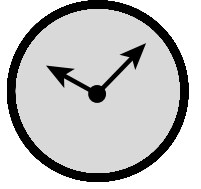
$28.4 \overline{)28}$

$29.5 \overline{)5}$

$30.7 \overline{)35}$

I need more practice with these facts:

Name _____ Date _____

BASIC FACTS: DIVISION

Find the quotient. Use strategies to help you.

1. $1 \overline{)4}$

2. $7 \overline{)42}$

3. $8 \overline{)24}$

4. $7 \overline{)7}$

5. $2 \overline{)12}$

6. $8 \overline{)32}$

7. $6 \overline{)30}$

8. $4 \overline{)8}$

9. $2 \overline{)0}$

10. $5 \overline{)40}$

11. $7 \overline{)0}$

12. $3 \overline{)24}$

13. $1 \overline{)7}$

14. $8 \overline{)72}$

15. $2 \overline{)16}$

16. $9 \overline{)9}$

17. $9 \overline{)54}$

18. $2 \overline{)6}$

19. $7 \overline{)63}$

20. $4 \overline{)0}$

21. $9 \overline{)81}$

22. $1 \overline{)1}$

23. $9 \overline{)36}$

24. $8 \overline{)0}$

25. $5 \overline{)45}$

26. $3 \overline{)12}$

27. $9 \overline{)18}$

28. $2 \overline{)8}$

29. $8 \overline{)56}$

30. $4 \overline{)4}$

I need more practice with these facts: