

Lunar Cycle vocabulary

Lunar Cycle

Waxing

Waning

Crescent

Gibbous

Full Moon

1st Quarter

3rd (Last) Quarter

©Madsciencelessons.com, 2014

Moon Phase Basics

Describe what the term waxing means.

Describe what the term waning means.

Describe the light on a waxing moon

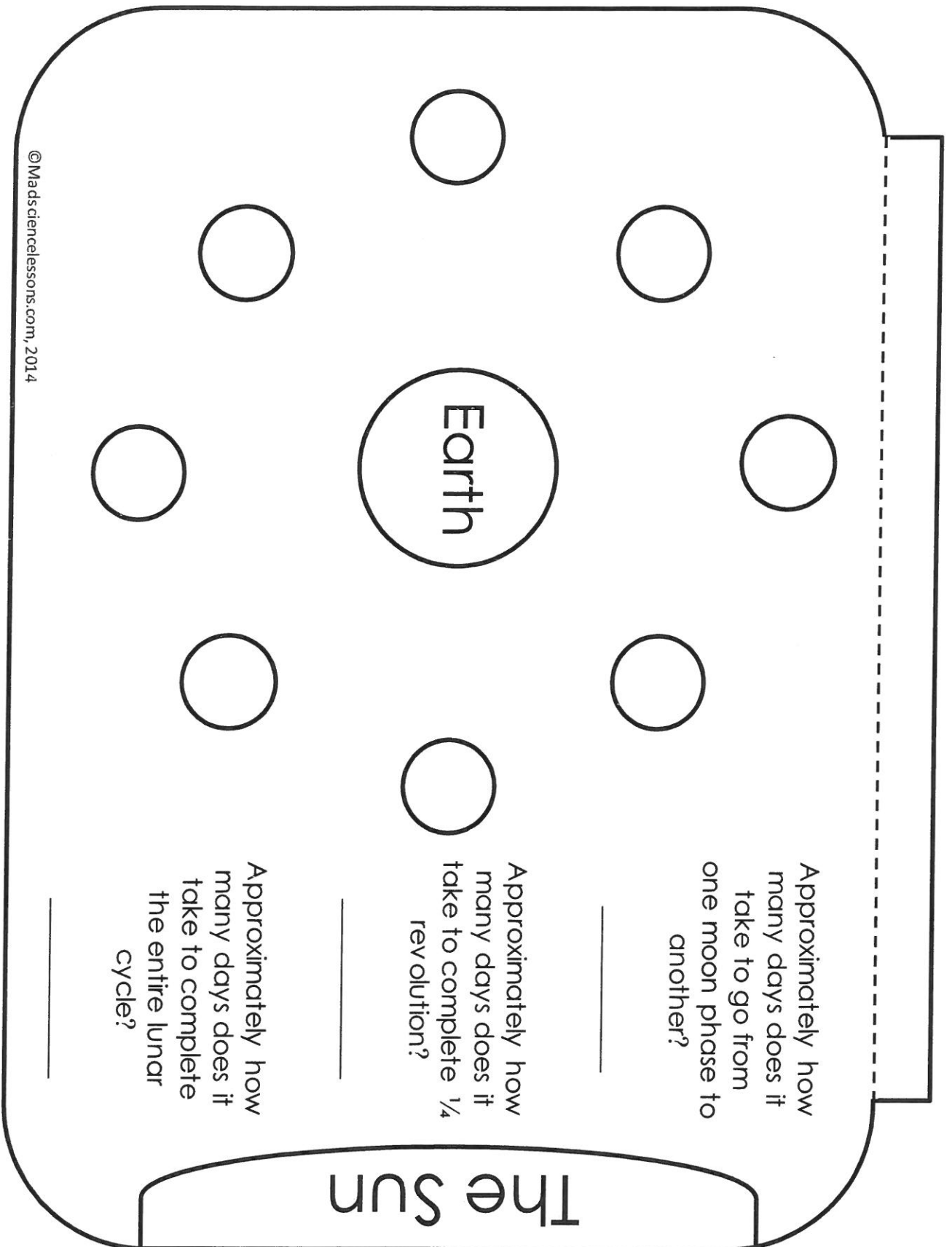
Describe the light on a waning moon

Describe a crescent shape and draw one.

Describe a gibbous shape and draw one.

©Madsiencelessons.com, 2014

Lunar Cycle Flip Book



©MadsScienceLessons.com, 2014

© Chris Kessler, www.KesslerScience.com




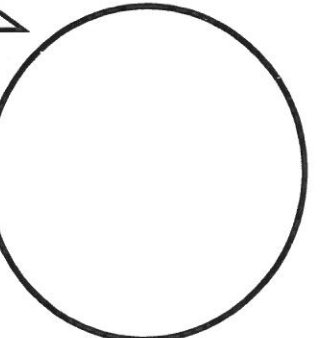
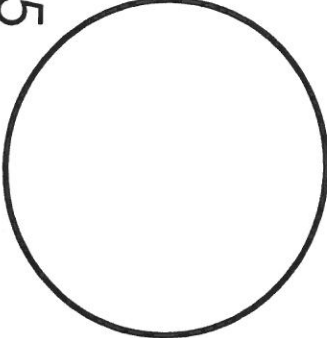

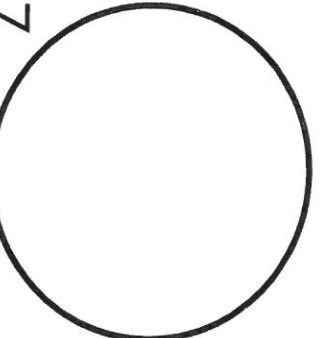
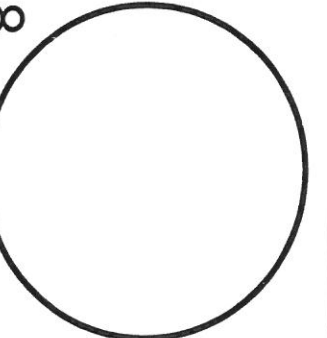
Approximately how many days does it take to go from one moon phase to another?

Approximately how many days does it take to complete $\frac{1}{4}$ revolution?

Approximately how many days does it take to complete the entire lunar cycle?

The Sun

Name That Moon Phase

1	
2	
3	
4	
5	
6	
7	
8	

©Madsiencelessons.com, 2014

Moon Phases Calendar

©Madsiencelessons.com, 2014

MONTH _____

Sunday	Monday	Tuesday	Wednesday	Thursday	Friday	Saturday